



33 marks

40 mins

Date

Instructions: 1. Answer all questions 2. Calculators permitted

Sample 1

Question 1 (10 marks - 1 mark each)

- a) The Maths class has 11 girls and 13 boys.
 - i) What is the ratio of boys to girls?
 - ii) What is the ratio of girls to the total number in the class?
- b) Write 5 : 10 as a fraction, a decimal and a percentage:
- c) Simplify: i) 3 : 12 ii) 5x : 15x
- d) The rose food is mixed with water in the ratio of 1 : 3. How much rose food is needed to make a mixture of 2 L?
- e) What percentage is 16 marks out of 20 marks?
- f) Calculate 75% of 40
- g) Write 100 m 10 seconds as a rate:
- h) Kiri earns a salary of \$3464.15 per fortnight, how much is earned in 6 months (26 weeks)?

Question 2 (10 marks - 1 each)

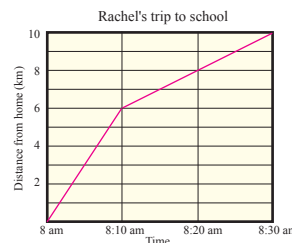
- a) Solve each of the following equations:
 - a) $x + 5 = 11$
 - b) $y - 3 = 15$
 - d) $5x - 2 = 16$

- b) i) Complete the table.
- ii) Draw a graph of the function.
- iii) Is the function linear or non-linear?

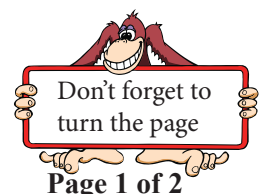
x	1	2	3	4	5
$y=2x + 3$					

- c) Rachel lives 10 km from school. The graph shows Rachel's trip to school. Rachel was first driven to her friend's place and then they both walked to school.

- i) How long did it take Rachel to get to her friend's place?
- ii) Calculate Rachel's walking speed in getting from her friend's place to school.



- d) A train is travelling at a constant speed of 60 km/h. The distance travelled is given by the function: $D = 46t$, where D is the distance in km, and t is the time in hours.
 - i) How far does the train travel in 3 hours?
 - ii) How long does it take the train to travel 40 km?

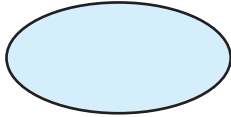


Question 3 (7 marks - 1 each)

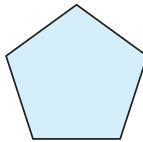
- a) What are the new coordinates after:
- i) The point $P(2,5)$ is translated 3 units right and 2 units down?
 - ii) The point $P(3,1)$ is reflected in the x-axis?
 - iii) The point $P(-6,0)$ is rotated 90° clockwise about the origin?

- b) Draw the lines of symmetry of each of the following shapes:

i)

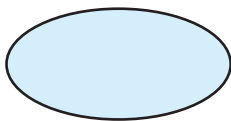


ii)

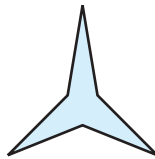


- c) What is the rotational symmetry order of each of the following:

a)



b)



Question 4 (6 marks)

Research question: Is there a relationship between the time it takes a rock to drop and the height it was dropped from?

Time (seconds)	1	2	3	4	5
Height (metres)	5	20	45	80	125

- i) Represent the data (Use a scatter plot to display the data). (2)
- ii) Describe the correlation, if any. (2)
- iii) Interpret the data and draw a conclusion related to the original research question. (2)

-----000O000-----



Year 7 Mathematics

End Term 4

33 marks

40 mins

Date

Instructions: 1. Answer all questions 2. Calculators permitted

Sample 2

Question 1 (10 marks - 1 mark each)

- The Maths class has 13 girls and 10 boys.
 - What is the ratio of girls to boys?
 - What is the ratio of boys to the total number in the class?
- Write $7 : 10$ as a fraction, a decimal and a percentage:
- Simplify: **i)** $12 : 4$ **ii)** $9x : 24x$
- The rose food is mixed with water in the ratio of $1 : 4$. How much rose food is needed to make a mixture of 4 L?
- What percentage is 14 marks out of 20 marks?
- Calculate 75% of 80
- Write \$40 for 10 trees as a rate:
- Aaron earns a salary of \$2763.90 per fortnight, how much is earned in 6 months (26 weeks)?

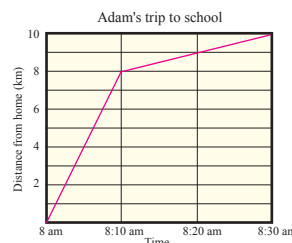
Question 2 (10 marks - 1 each)

- Solve each of the following equations:
 - $x + 8 = 12$
 - $y - 9 = 13$
 - $3a - 4 = 32$

- Complete the table.
 - Draw a graph of the function.
 - Is the function linear or non-linear?

x	1	2	3	4	5
$y=3x+2$					

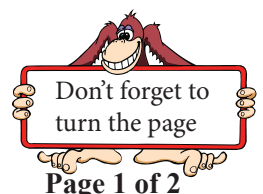
- Adam lives 10 km from school. The graph shows Adam's trip to school. Adam was first driven to his friend's place and then they both walked to school.



- How long did it take Adam to get to his friend's place?
- Calculate Adam's walking speed in getting from his friend's place to school.

- A train is travelling at a constant speed of 40 km/h. The distance travelled is given by the function: $D = 40t$, where D is the distance in km, and t is the time in hours.

- How far does the train travel in 2 hours?
- How long does it take the train to travel 60 km?

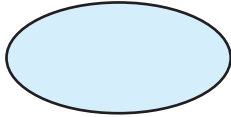


Question 3 (7 marks - 1 each)


- a) What are the new coordinates after:
- i) The point P(4,2) is translated 2 units right and 2 units down?
 - ii) The point P(5,1) is reflected in the x-axis?
 - iii) The point P(-7,0) is rotated 90° clockwise about the origin?

- b) Draw the lines of symmetry of each of the following shapes:

i)

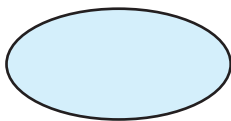


ii)

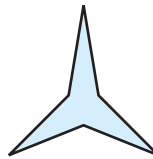


- c) What is the rotational symmetry order of each of the following:

a)



b)



Question 4 (6 marks)

Research question: Is there a relationship between the voltage and the current in a circuit?

Current (amps)	0.2	0.3	0.4	0.5	0.6	0.7
Voltage (volts)	30	45	60	75	90	105

- i) Represent the data (Use a scatter plot to display the data). (2)
- ii) Describe the correlation, if any. (2)
- iii) Interpret the data and draw a conclusion related to the original research question. (2)

-----000O000-----